

# Christmaths with The Simpsons

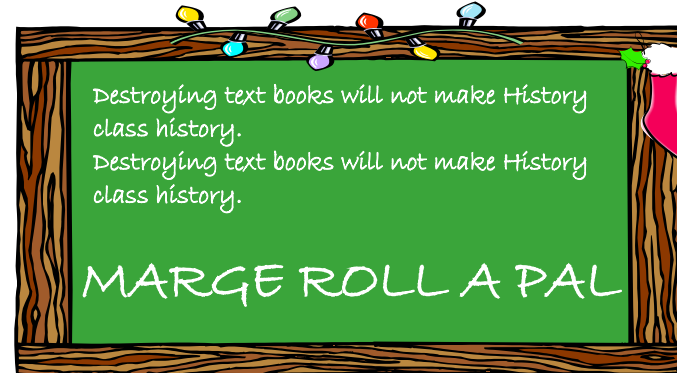


## Marge's Problem

Santa brought Marge a 'Sudoku' style photo frame. The frame is a 9x9 grid that has been subdivided into nine smaller grids of 3x3 squares. Each row, column and 3x3 square must contain a photo of each of 9 close friends and family. Some of the photos have been put in place. Where are the rest of the photos positioned? (use the initial letters in your answer)

*Marge:* Now I know you haven't liked some of my past suggestions, like switching to the metric system.  
*Grampa:* The metric system is the tool of the devil! My car gets 40 rods to the hogshead and that's the way I likes it!



Today's screened Maths moment



Today's Chalkboard Anagram (1 word)